

ЛОГИКА • МАТЕМАТИЧЕСКО МИСЛЕНЕ • НАБЛЮДАТЕЛНОСТ  
ФИНА МОТОРИКА • ВЪОБРАЖЕНИЕ


2

# Забавни задачки

148  
страници

# УМНИЦИ






$$4 < 5$$



$$\square < \square$$




$$\square > \square$$



$$\square = \square$$










$$\square = \square$$



$$\square < \square$$

Преброй и запиши по колко рибки плуват във всеки аквариум. След това постави знак по-голямо (>) или по-малко (<) за всяка двойка аквариуми.

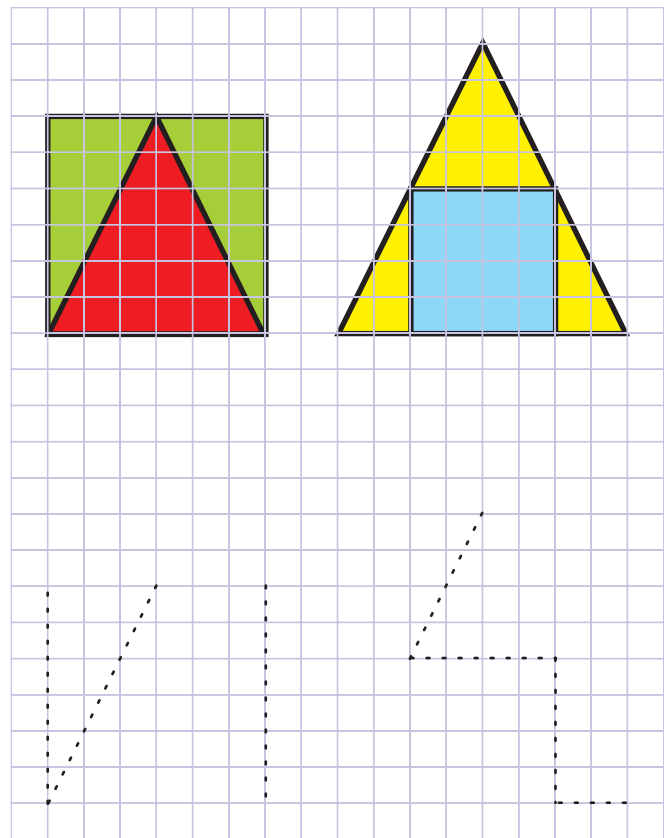
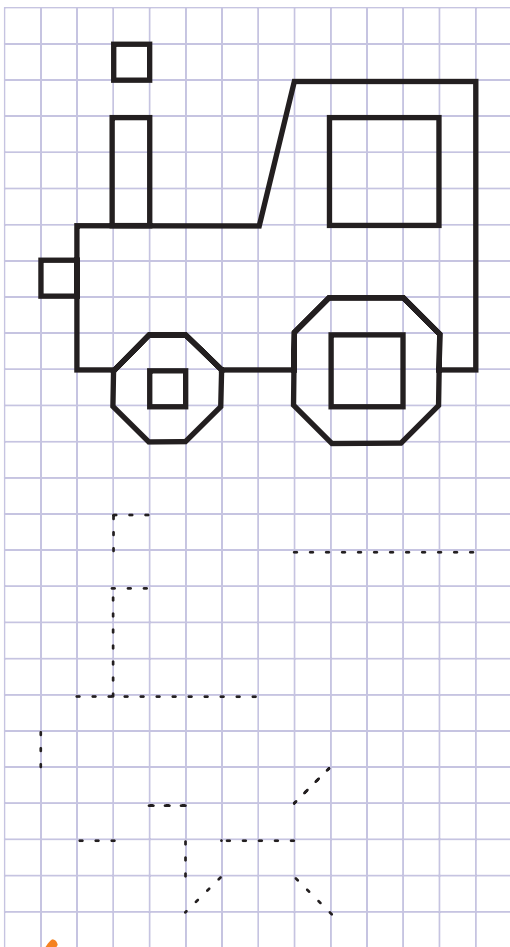
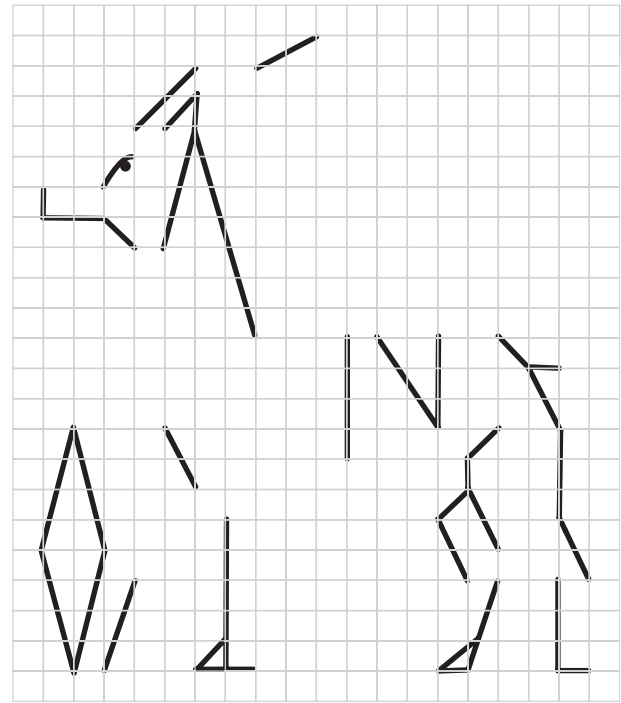



Запиши на празната половина на доминото точната цифра, така че сумата на точките, посочена горе, да е вярна.

1	2	3	1		4	5		6	1	6
---	---	---	---	--	---	---	--	---	---	---

$$1 + 2 = 3$$

Довърши редицата с цифри.



Довърши рисунките, като използваш подсказките.



**ПРИМЕР**

1	x	4	4
+		-	
2	+	3	5
3		1	

Попълни празните места, като следваш примера.

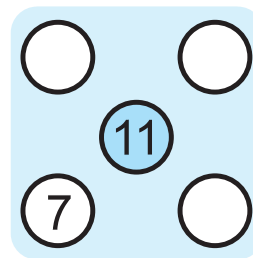


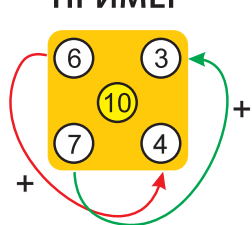
	-	3	3
+		x	
3	+		5
9		6	

2	+		4
x		x	
	+	2	6
8		4	

	-	2	5
+		x	
	+	3	5
9		6	

6	+		8
-		x	
	+	4	8
2		8	

**ПРИМЕР**



Попълни квадратчетата, като следваш примера. Целта е сборът на числата по диагонал да е равен на числото в центъра.